


1. What is the smallest prime number that is larger than 31? _____ 1

2. How much is 350% of 20% of 30? _____ 2

3. Express $\frac{3}{8}$ as a decimal correct to 3 decimal places. _____ 3

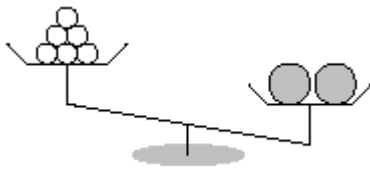
4. The perimeter of the rectangle $ABCD$ is 44, and one of its sides is 15. What is the area of the rectangle?



_____ 4

5. In 2015, 330 students registered to participate in the Elmacon competition. 132 of them are boys. What percent of the total registration is of girls? _____(%) 5

6. The scale is balanced. The weight of each of the smaller weights is 2 kg. What is the combined weight (in kg) of all weights (smaller and larger)?



_____ (kg) 6

7. The cost of a pair of shoes (before tax of 12%) is 150 dollars. What is the total cost including tax? _____ (\$) 7


8. What is the value of $(2 \times (0 + 1) \times 5) \times 5 \times 2$? _____ 8

9. How many whole numbers smaller than 2015 have digit sum of 26? _____ 9

Grade Seven (7) Division

10. If you reduce the volume of a cube by 27.1%, by what percent do you reduce the value of its side? _____ (%) 10

11. The side of the larger square is 20 and the side of the smaller square is 17. What is the area of the shaded region?



_____ 11

12. P, Q, and R are the three largest different primes all smaller than 12. What is their product? _____ 12

13. You roll two fair dice. What is the probability that both show “1”? _____ 13

14. The perimeter of a rectangle is 51 and its area is 161. What is the value of its largest side?

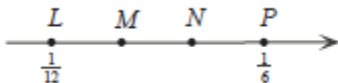


_____ 14

15. Express $\frac{1}{2015} + \frac{2}{2015} + \dots + \frac{9}{2015}$ as a fraction in lowest terms. _____ 15

16. Gordi likes to trade Magic cards. He bought a card for \$100. Then, he sold it for \$ 110, bought it again for \$120, sold it again for \$130, and so on in increments of \$10 until he finally sold the card for \$270. What was his total profit from the combined trading transactions (in \$)? _____ (\$)16

17. The points L , M , N , and P are equally spaced. What is the value of $N - M$?



_____ 17

18. It takes 10 hours for 10 identical tractors to plow a 10 hectare field. How much time (in hours) does it take one tractor to plow a one hectare field? _____ (h)18

Grade Seven (7) Division

19. In the subtraction below, what is the value of $M + K + N + L$?

$$\begin{array}{r} 5\ K\ 3\ L \\ -\ M\ 4\ N\ 1 \\ \hline 4\ 4\ 5\ 1 \end{array}$$

20. N , $N + K$, and $N + 2K$ are all integers and $K > 0$.
 $N(N + K)(N + 2K) = P$ where P is prime.

What is the value of N ?

21. Jake tossed a coin 5 times and got at least one head.
 What is the probability that he got exactly 4 heads?
 Express your answer as a common fraction in lowest terms.

22. You can use the digits 2, 0, 1, and 5 to form three digit numbers (but only the digit 1 is allowed to be used more than once). How many numbers can be formed? Examples for valid numbers: 111, 101, 251, 502.

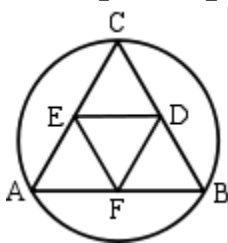
23. A regular polygon has 120 sides. How many non congruent regular polygons can be drawn using corners of this polygon as their corners?

24. Yoko is more than 8 years old and is younger than 50.
 The sum of all factors of her age is twice her age.
 What is her age (in years)? Note that 1 and N are factors of N .

25. Alice selects at random a digit from the four digits 2, 0, 1, 5. Then, Bob selects at random a digit from 2, 0, 1, 5, possibly the same digit as Alice's.
 Suppose that Alice's selected digit is N , and Bob's selected digit is M .
 What is the probability that $N - M$ is less than 3?
 Express your answer as a common fraction in lowest terms.

26. ABC is an equilateral triangle inscribed in a circle with radius 1.
 D , E , and F are mid points of the sides of ABC . What is

the area of triangle DEF ? Express your answer as $\frac{p\sqrt{q}}{n}$
 where p and q are primes and n is a whole number.



19

20

21

22

23

24

25

26