

Put ID Sticker Here

# SPRINT ROUND – GRADE

# 6

No Peeking: Wait for instructions to start!

---

This area is for the use of the markers only

Problems 1-9 (max 9)	Problems 10-18 (max 9)	Problems 19-26 (max 8)	Stage Tot. (max 26)	Re-marker Name

1.  $x = \frac{1}{4} + \frac{2}{3}$ . Express  $x$  as a fraction in lowest terms. 11/12 1.

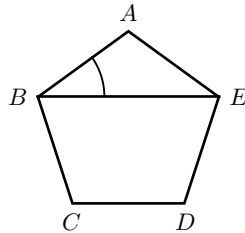
2. There are two platters of cookies: the first has 8 cookies and the second has 12 cookies. If one cookie is moved from the first platter to the second platter, what percentage of all cookies will be on the first platter? 35 (%) 2.

3.  $N > 0$  is the smallest even number such that  $78 < 0.75N$ . What is  $N$ ? 106 3.

4. For every 100 grade 7 students, there are 104 grade 6 students. If there are 130 grade 6 students at ELMACON, how many grade 7 students are there? 125 4.

5.  $x > 0$  and  $x - \frac{289}{x} = 0$ . Find  $x$ . 17 5.

6. ABCDE is a regular pentagon. What is the value of  $\angle ABE$  in degrees ( $^\circ$ )?



36 ( $^\circ$ ) 6.

7. Amy spent \$650 on baby needs. She bought 320 diapers at a cost of \$0.45 per diaper. What percentage of her spending was on diapers? Round the answer to the nearest whole number. 22 (%) 7.

8. Calculate  $\frac{1 + 2024}{2500}$ . Express the answer as a fraction in lowest terms. 81/100 8.

9.  $x$  is a 2-digit positive number whose digits are two different primes.  $y$  is defined to be the 2-digit positive number with the digits of  $x$  reversed. What is the maximum possible value of  $N = x + y$ ? 132 9.

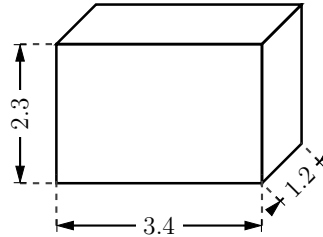
10. The following is an arithmetic sequence:  $N, N + K, N + 2K, N + 3K, \dots$ . The value of the 2024<sup>th</sup> term of the sequence is 10000, and the value of the 1000<sup>th</sup> term is 784. What is the value of  $N$  (the first term)?

$$\underline{-8207} \quad 10.$$

11. 200 cups of coffee were prepared. Sugar was added to 140 of them and milk was added to 120 of them. Of these 200 cups, 100 had both sugar and milk. How many of the cups had neither sugar nor milk?

$$\underline{40} \quad 11.$$

12. What is the total area of the 6 faces of a box with sides 1.2, 2.3, and 3.4? Round the answer to the nearest whole number.



$$\underline{29} \quad 12.$$

13.  $N + M = 60$  where  $N < M$  are both primes. How many different values of  $N$  are there?

$$\underline{6} \quad 13.$$


14. Express  $0.5333\dots$  as a fraction in lowest terms.

$$\underline{8/15} \quad 14.$$

15. A box contains 5 white marbles and 6 black marbles. Andrew took 2 marbles out of the box at random and placed them on the table. What is the probability that at least 1 of the marbles was white? Express the answer as a fraction in lowest terms.

$$\underline{8/11} \quad 15.$$

16. What is the value, in degrees, ( $^\circ$ ), of the acute angle between the hour hand and the minute hand of a clock at the time 3:32pm (3 hours and 32 minutes)?



$$\underline{86} \quad (^\circ) \quad 16.$$

17. Rona rides her bike at a speed of 8 metres per second (8 m/s) for 14 minutes, and at a speed of 12 m/s for 24 minutes. How far does she travel, in kilometres (km)?

$$\underline{24} \quad (\text{km}) \quad 17.$$

18. The temperature of magma inside a volcano is  $T_F = 2024^\circ F$  (degrees Fahrenheit). Convert this to degrees Celsius ( $^\circ C$ ) using the equation

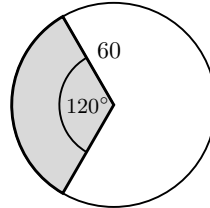
$$T_F = 32 + T_C \times \frac{9}{5}$$

where  $T_C$  is the temperature in Celsius. Round the answer to the nearest whole number.

$$\underline{1107} \quad (^\circ C) \quad 18.$$

19. What is the sum of the prime factors of 2024? 36 19.

20. What is the perimeter of a  $120^\circ$  sector of a circle with radius 60? Use  $\pi = 3.14$  and round the answer to the nearest whole number.



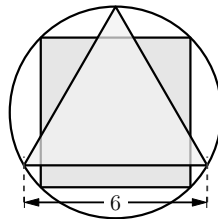
246 20.

21. When  $999,999^2$  is expressed as a whole number, how many of the digits are equal to zero? 5 21.

22. 84 people are invited to a party. If a  $6 \times 6$  square cake feeds 4 people, how many  $9 \times 12$  cakes should be ordered to feed all 84 people? 7 22.

23. There are 4 aces in a deck of 9 cards. Dan was dealt 3 cards (at random) from this deck, and at least one of them was an ace. What is the probability that he was dealt no more than 2 aces? Express the answer as a fraction in lowest terms. 35/37 23.

24. An equilateral triangle and a square are inscribed in the same circle. The length of the side of the triangle is 6, calculate the area of the square.



24 24.

25. The sum of the two largest prime factors of  $N$  is 40. The sum of the two smallest prime factors of  $N$  is 7. What is the smallest possible value of  $N$ ? 3190 25.

26. Larry and Mike play a game. Two fair dice are rolled: if the sum ( $N + M$ ) of the dice is even, Larry pays Mike  $N \times M$  tokens; if the sum is odd, Larry receives  $N \times M$  tokens from Mike. The game is played twice. What is the probability that after 2 games, Mike's net gain (in tokens) is 19? Express the answer as a fraction in lowest terms. 1/81 26.